

KENDRIYA VIDYALAYA NO 2 FARIDABAD
SUMMER VACATION HOLIDAY HOMEWORK FROM (CLASS 6th-10th)
CLASS -6th

SUBJECT – ENGLISH

INSTRUCTIONS:


1. Do holiday homework in separate Rs 10 notebook.
2. Do Project work in Scrap Book.

HOLIDAY HOMEWORK:

1. PARAGRAPH WRITING:
 - a) Write a paragraph on any sportsperson from MANIPUR and HARYANA.
2. NOTICE WRITING:

You are Ragini/ Shyam of class VI, KV No.2 Faridabad. You have lost your library books which were issued to you, during your games period. Draft a notice for the school notice board, informing the student about it.
3. APPLICATION WRITING:
 - a) Write an application to the principal requesting her for four days leave to attend your brother's marriage in Rajasthan.
 - b) Write an application to the principal requesting him for full fee concession.
4. LETTER WRITING:
 - a) Write a letter to your father asking him to send you money for buying watch.
5. Write description of any 2 poets of your textbook with their pictures.
Sample :

R. K. Narayan



Narayan on a 2009 stamp of India

Born

Krishnaswami Iyer Narayanaswami
10 October 1906

Madras, Madras Presidency, British Raj

Died	13 May 2001 (aged 94) Chennai, Tamil Nadu , India
Occupation	Writer
Alma mater	Maharaja's College, Mysore
Genre	Fiction, mythology and non-fiction
Notable awards	<ul style="list-style-type: none"> • Padma Vibhushan • Sahitya Akademi Fellowship • Benson Medal
Spouse	Rajam (m. 1934; died 1939)
Children	1, Hema Narayan
Relatives	R. K. Laxman (brother)

Signature



[Member of Parliament, Rajya Sabha](#)

In office

12 May 1986 – 31 May 1992

6. Write 2 new words daily. Find out their meanings and make sentence on your own in separate Vocabulary Notebook (100 pages)
7. PROJECT WORK: (do in scrap book)
 - a) Write an importance of Millets and write information on each millet, paste it's pictures, collect millets in a small polyethene packets etc.)- Note:-Include pictures wherever required.
 - b) Read handout on G-20 and answer the related questions on Sheets. G-20 document is shared in your class group along with the questionnaire.
8. Learn complete syllabus done in the class for PT-1 Exams in July.

विषय: - संस्कृतम्।

- 1- 10 जानवरोंकेनामसंस्कृतमेंचित्रसहितलिखिए ।
- 2- 10 पक्षियों। केनामसंस्कृतमेंचित्रसहितलिखिए।
- 3- 10 फलोंएवं 10 सब्जियोंकेनामसंस्कृतमेंचित्रसहितलिखिए ।
- 4- 1से 30 तकसंस्कृतगिनतीलिखकरयादकीजिए ।
- 5- यहसभीकाम C W COPY मेंकरें।

SUBJECT- MATHEMATICS

1) Write each of the following in numeral form:

- (i) Eight thousandtwelve.
- (ii) Seventy thousand fifty three.
- (iii) Five lakh seven thousand four hundredsix.
- (iv) Six lakh two thousand nine.
- (v) Thirty lakh eleven thousandone.
- (vi) Eight crore four lakh twentyfive.
- (vii) Three crore three lakh three thousand three hundredthree.
- (viii) Seventeen crore sixty lakh thirty thousand fiftyseven.

2) Write the greatest and the smallest numbers.

- (a) 4536, 4892, 4370, 4452.
- (b) 15623, 15073, 15189, 15800.
- (c) 25286, 25245, 25270, 25210. (d) 6895, 23787, 24569, 24659.

3). Arrange the following numbers in ascending order

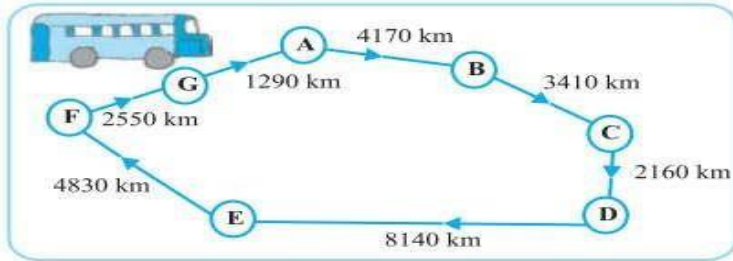
:(a) 5000, 7500, 85400, 7861

(b) 1971, 45321, 88715, 92547

4) Arrange the following numbers in descending order :

(a) 847, 9754, 8320, 571 (b) 9801, 25751, 36501, 38802

4). A bus started its journey and reached different places with a speed of 40 km/hour.



- (i) Find the total distance covered by the bus from A to D.
- (ii) Find the total distance covered by the bus from D to G.
- (iii) Find the total distance covered by the bus, if it starts from A and returns back to A.
- (iv) Can you find the difference of distances from C to D and D to E?
- (v) Find out the time taken by the bus for each

5. Write the corresponding numeral for each of the following:

- (i) $7 \times 1000 + 2 \times 1000 + 5 \times 100 + 9 \times 10 + 6 \times 1$
(ii) $4 \times 100000 + 5 \times 1000 + 1 \times 100 + 7 \times 1$
(iii) $8 \times 1000000 + 3 \times 1000 + 6 \times 1$
(iv) $5 \times 10000000 + 7 \times 1000000 + 8 \times 1000 + 9 \times 10 + 4$

6)1.. Are all natural numbers also wholenumbers?

2. Are all whole numbers also naturalnumbers?

3. Which is the greatest wholenumber?

7)1. Write the predecessor and successor of 18; 1997; 12001; 49;100003.

2. Is there any natural number that has no predecessor?

3. Is there any natural number which has no successor? Is there a last natural number?

8) Write and learn table up to 20.

9) Write prime numbers up to 100.

SUBJECT- SUNSKRIT

1 मेराविद्यालयविषयपर 100 से 150 शब्दोंकीबीचअनुच्छेदलिखिए।

2. अपनेकिसीप्रियपक्षीकेविषयमेंचित्रात्मकजानकारीएकत्रकरकेलिखो। (पक्षीकानाम, प्रजाति, खान-पान, रहनेकातरीका, आदि)

3. पाँचदिनकेअवकाशकेलिएप्राचार्यकोपत्रलिखिए।

4. प्रतिदिनकिन्हीं 10 शब्दोंकाश्रुतलेखवसतभाग।पाठ्यपुस्तकमेंसेकरें। [पतलीकॉपीमें]

5 किन्हीं 20 शब्दोंकालिंगबदलकरलिखो।

6 वचनबदलो (कोई 20 शब्द)

7 पूर्वोत्तरराज्यमणिपुरकेपरिधानवआहारपरजानकारीएकत्रकरनेलिखिए।

8 बालरामकथाकेकिसीभीअध्यायपरचित्रकथा (कॉमिक्स) बनाएं

SUBJECT--SOCIAL SCIENCE

1-Make scrapbook/project file on Historical monuments of Haryana or Manipur.

* **Complete the following questions in your SST copy.**

2-Draw a list of different festivals celebrated in your locality?

3. Draw a sketch of your school and locate the following:

- (a) the principal's room (b) your classroom(c) the playground (d) the computer room(e) some big trees
(f) drinking water.

4-Map work-

MAP 1---On an outline map of India locate the following:

- (a) Ganga and its tributaries (b) Indus and its tributaries (c) Narmada river
- (d) SulaimanandKirthar hills.(e) Garo hills.

MAP2---On an outline map of India label and locate state with capital and union territory.

5- List the cereals that you eat. Do you grow the cereals you eat? If yes, draw a chart to show the stages in growing them. If not, draw a chart to show how these cereals reach you from the farmers who grow them.

6-Revision (first chapter of history, Geography and civics) for 1st periodic test.

Complete all pending class work and home work in your S.S.T notebook

SUBJECT - SCIENCE

1. Make a simple electric circuit using materials like piece of wire, battery, cell , bulb ,tape etc.
2. Find out creative way of using the waste items such as empty bottles, cups, used envelopes, used jeans , etc. Make two creative and attractive things from these waste.
3. Draw a diagram of solar system eclipse and lunar eclipse on chart paper and label it
4. Prepare 10 flash cards using thick colour sheet/cardboard about parts of plants and types of plants.
5. Draw the diagram of each method of separation in class-work register and explain each of it in 5-10 lines.

SUBJECT – COMPUTER SCIENCE

All the students do it in your Computer Notebook

1. MS Word shortcut Keys.
2. Draw the picture of MS Word Screen in your Notebook.

Make a chart on the following topic.

- Roll No.(1-24)

Input & Output Devices

- Roll No.(25-50)

Language Translators (Assembler, Compiler, Interpreter)

CLASS -7th

SUBJECT- ENGLISH

INSTRUCTIONS:


3. Do holiday homework in separate Rs 10 notebook.
4. Do Project work in Scrap Book.

HOLIDAY HOMEWORK:

9. Write description of any 2 poets of your textbook with their pictures.

Sample :

R. K. Narayan



Narayan on a 2009 stamp of India

Born	Krishnaswami 10 Madras, Madras Presidency, British Raj	Iyer October	Narayanaswami 1906
Died	13 Chennai, Tamil Nadu , India	May	2001 (aged 94)
Occupation	Writer		
Alma mater	Maharaja's College, Mysore		
Genre	Fiction, mythology and non-fiction		
Notable awards	<ul style="list-style-type: none">• Padma Vibhushan• Sahitya Akademi Fellowship• Benson Medal		

Spouse Rajam
(m. 1934; died 1939)

Children 1, Hema Narayan

Relatives [R. K. Laxman](#) (brother)

Signature



[Member of Parliament, Rajya Sabha](#)

In office
12 May 1986 – 31 May 1992

10. APPLICATION WRITING:

- Write an application to the principal requesting for an excursion.
- Write an application to the principal requesting for change of section.

11. LETTER WRITING:

- Write a letter to your father asking him to send you money for buying books.
- Write a letter to your uncle thanking him for the birthday present.

12. PARAGRAPH WRITING:

- Importance of Trees.
- Effects of Pollution

13. Complete all your pending written work in your classwork and learn them for your PT-1 Exams.

14. NOTICE WRITING:

- Write a notice for organizing an Inter- School Poetry Competition.

15. Write 2 words daily. Find out meanings in both English and Hindi and make sentence of your own in Separate Vocabulary Notebook.

16. PROJECT WORK: (do in scrap book)

- Write an importance of Millets and write information on each millet, paste it's pictures, collect millets in a small polyethene packets etc.)- Note:-Include pictures wherever required.
- Read handout on G-20 and answer the related questions on Sheets. G-20 document is shared in your class group along with the questionnaire.

SUBJECT- MATHEMATICS

1. Do the following activities in your notebook.
 - a) Multiplication of fraction with a whole number.
 - b) Multiplication of fraction by a fraction
 - c) Multiplication as an operator 'of'
 - d) Division of whole number by a fraction
 - e) Division of fraction by another fraction.

विषय: - संस्कृतम्।

1. बालक, बालिका, पुष्प, किम्केशब्दोंकेरूपलिखिए।
2. पठ्, गम्, कृ, चर्, धाव्धातुओंकेरूपपांचौलकारोंमेंलिखिए।
3. कोई 10 श्लोकअर्थसहितलिखकरयादभीकरें।
4. 10 पशुओंकेनामसंस्कृतमेंचित्रसहितलिखिए।
5. 10 फलोंएवं10 सब्जियोंकेनामसंस्कृतमेंचित्रसहितलिखिए।
6. संस्कृतछात्रप्रतिज्ञातथाप्रार्थनायादकीजिए।
7. यहसभीकामC W COPY मेंकरें।

SUBJECT -HINDI

1. अनुच्छेदलिखिए – 1मेरादेशमहान2विज्ञानवरदानयाअभिमान।
2. पत्रलेखन– जन्मदिनकेउपहारकेलिएधन्यवाददेतेहुएचाचाजीकोपत्र।

. मित्रकोअपनेनएघरकेविषयमेंबतातेहुएपत्रलिखो
3. विलोमशब्द (कोई२०), पर्यायवाची (20), श्रुतिसमभिन्नार्थक (20), अनेकशब्दोंकेलिएएकशब्द (10)लिखिए।
4. बालमहाभारतकथाकेकिसीभीअध्यायकोचित्रकथा (कामिक्स)बनाकरलिखे।
5. पंचतंत्रकीकहानियांपढेवकिसीएककहानीकासारलिखे।
6. 1 से10 तकमणिपुरीभाषामेंगिनतीलिखेवयादकरें।

SUBJECT- SOCIAL SCIENCE

- 1- Make a chart or picture on " Indian Parliament
- 2- Read and write 20 lines of Hindi and English
- 3- Find out difficult words 5-10 and learn it
- 4- Complete your notebook and learn questions answers
- 5- On an outline map of India locate and label 28 states.

SUBJECT – COMPUTER SCIENCE

All the students do it in your Computer Notebook

1. Explain the type of charts & its name.
2. Explain the commonly used number system.
3. Define the following
 - Field
 - Record
 - Field Name
 - Cell

Make a chart on the following topic.

Computer safety and security

https://drive.google.com/file/d/17cBoSPaVmkkUwS8f7w2xv_zvd4Ib5bDS/view?usp=drivesdk

SUBJECT -- SCIENCE

1. Makeup magazine with the name the changing world

The magazine could include

- a) latest articles related to science
- b) picture showing changing around the world before and after corona period

2. Draw diagram in A4 size sheet

- a) human excretory system
- b).human circulatory system
- c)human digestive system

3. Right slogan poster project PPT on any of the following topic

Save water / Heritage of India / balanced diet.

4. Write answer of these questions in class work register

- a) The tiny opening present on the leaf surface .What are they called what are their functions ?
- b) Accept plants why can't other living things prepare their own food ?
- c) Potatoes and gingers both are underground parts that store food where is the food prepared in these plants ?
- d) Which part of the plant is called the food factory of the plant ?
- e) Fungus can be useful and harmful give examples of these properties.
- f) What is lichens?

CLASS- 8th

SUBJECT – ENGLISH


INSTRUCTIONS:

- i. Do holiday homework in separate Rs 10 notebook.
- ii. Do Project work in Scrap Book.

HOLIDAY HOMEWORK:

1. Learn complete syllabus done in the class for PT-1 Exams in July.
2. Write 2 new words daily. Find out their meanings and make sentence on your own in separate Vocabulary Notebook (100 pages)
3. Make a collage based on any two events during the World War 1.
4. POSTER MAKING: Collect information on 'Disaster preparedness' and prepare a poster on the same.
5. Watch any one of the following movies and write about one of the characters that impresses them the most. (100-120 words)
 4. Mangal Pandey : The Rising
 5. Shaheed
 6. The legend of Bhagat Singh
 7. Sardar
 8. Netaji Subhash Chandra Bose : The forgotten Hero
6. Write description of any 2 poets of your textbook with their pictures.
Sample :

R. K. Narayan



Narayan on a 2009 stamp of India

Born


Krishnaswami Iyer Narayanaswami

10 October 1906

[Madras](#), [Madras Presidency](#), [British Raj](#)

Died	13 May 2001 (aged 94) Chennai, Tamil Nadu , India
Occupation	Writer
Alma mater	Maharaja's College, Mysore
Genre	Fiction, mythology and non-fiction
Notable awards	5) Padma Vibhushan 6) Sahitya Akademi Fellowship 7) Benson Medal
Spouse	Rajam (m. 1934; died 1939)
Children	1, Hema Narayan
Relatives	R. K. Laxman (brother)

Signature



[Member of Parliament, Rajya Sabha](#)

In office

12 May 1986 – 31 May 1992

7. **NOTICE WRITING:** Write a Notice for organizing an Inter House poetry competition. (50 words)
8. Complete your all-written work in your notebook. Learn and revise them for your PT-1 Exams.
9. **DIARY ENTRY:** Suppose you were one of the victims of Tsunami. Write a diary entry for the same. (100-120 words)
10. **PARAGRAPH WRITING:** (100-120 words)
Write a paragraph on any musician from MANIPUR and HARYANA.
11. **PROJECT WORK:**
 - a) Read handout on G-20 and answer the related questions on Sheets. G-20 document is shared in your class group along with the questionnaire.
 - b) Write an importance of Millets and write information on each millet, paste it's pictures, collect millets in a small polyethene packets etc.)- Note:-Include pictures wherever required.

VALUE BASED QUESTION:

12. Imagine you are Jim Macpherson and you met Hans Wolf in England by chance. Exchange a few dialogues on the destruction caused by war and suggest the ways to resolve conflict and avoid the situation of war. **(The Best Christmas Present in the world)**
13. Make comic strip of the poem THE ANT AND THE CRICKET.

SUBJECT- HINDI

1. स्वरचितकवितलेखनकरेंमदर्सडेपरमांकेलिए।
2. मित्रकेकक्षामेंप्रथमआनेपरउसेबधाईदेतेहुएपत्रलिखिए।
3. किन्हीं 20 शब्दोंकेदोदोपर्यायवाचीशब्द,श्रुतिसमभिन्नार्थकशब्द,अनेकशब्दोंकेलिएएकशब्दलिखें।
4. प्रतिदिन 15 शब्दोंकाश्रुतलेखपाठ्यपुस्तकबसंतसेकरें।
5. किसीमनोरंजकयात्राकावर्णनकरें।
6. प्रतिदिनहिंदीकासमाचारपत्रपढ़ेऔरकिन्हीं 20 हेडलाइनकोकाटकरचिपकाए

SUBJECT-SCIENCE

1 In Your classwork copy make a poster

- (1) World environment day 5/6/23
 - (2) No tobacco day 26/6/23
 - (3) Conservation day
 - (4) World population day
- 2 Make a list of healthy habits that I follow
 - 3 Visit the National Museum and write what you see and observe in cw copy
 - 4 Make a science magazine with newspaper and make science toons get your eyes test tested in dispensary and right the report
 - 5 With plastic cut bottles or kulhads or earthen pot make drip irrigation system
 - 6 Make a model of best out of waste and submit for project marks
 - 7 Read and learn chapter 1,2,3 with exercise question
 - 8 Draw nitrogen cycle with colorful labelling on a chart paper.

SUBJECT-MATHEMATICS

1. Learn Multiplication Tables from 1 to 20.
2. Learn Squares of the numbers from 2 to 25.
3. Hat properties, the following expressions show? (i) $\frac{2}{3} + \frac{4}{5} = \frac{4}{5} + \frac{2}{3}$
(ii) $\frac{1}{3} \times \frac{2}{3} = \frac{2}{3} \times \frac{1}{3}$

(iii) For two Rational Numbers , a and b , a+b is also a Rational Number.

4. If a = 12, b = 34, verify the following:

$$a \times b = b \times a$$

$$a + b = b + a$$

5. Find which of following are rational numbers: 67, $-\frac{1}{2}$, 0, $\frac{1}{0}$, $\frac{100}{0}$

6. Find the reciprocal of the following rational numbers:

(a) $-\frac{3}{4}$ (b) 0 (c) $\frac{6}{11}$ (d) $\frac{5}{-9}$

7. Identify the linear equations in one variable from the given expressions.

(a) $x^2 + x = 2$ (b) $3x + 5 = 11$ (c) $5 + 7 = 12$

8) Do as directed :

Add $\frac{2}{5}$ and $-\frac{3}{7}$

Subtract $\frac{3}{8}$ from $-\frac{4}{7}$

Multiply $\frac{6}{5}$ and $\frac{17}{13}$

Divide $\frac{4}{9}$ by $-\frac{13}{12}$

9. What is the multiplicative identity of rational numbers?
10. Write two such rational numbers whose multiplicative inverse is same as they are.

11. Write two examples where rational numbers are following commutative property under multiplication.

12. PROJECT

Make a Project on “ Importance of Mathematics in Real World. “

13. check whether the liner equation $3x+ 5=11$ is true.

14. From a liner equation from the given statement “When 5 is added to twice a number, it gives 11.

15. My Father’s age 5 year ago plus twice my age now gives 65. My age 5 year ago plus 3 times my father’s age now gives 130. What is my father’s age?

16. If the sum of two consecutive numbers is 11, find the number.

17. Solve the following:

$$(7x+14)/3 - (17- 3x)/5 =6x - (4x-3)/3 - 5$$

MATHEMATICAL UNIT 1: SWEET SHOP

Three friends Ram, Rahim and David went to “RADHEY SWEET MART” to purchase some sweets, namkin and cold drinks for New year party. The following chart shows the price and available stock of sweets and namkin in the shop.

S.NO.	SWEETS AND NAMKIN	AVAILABLE STOCK	PRICE
1	SWEET LADDU	10 Kg	₹ 400 per Kg
2	JALEBI	8 Kg	₹ 360per Kg
3	BARFI	7 Kg	₹ 300 per Kg
4	MIX-NAMKIN	100 packets	₹ 80 per packet
5	POTATO CHIPS	80 packets	₹ 30 per packet
6	COLD DRINKS	50 Bottles	₹ 50per bottle
7	ROASTED DRY FRUITS	12 Kg	₹ 1000 per Kg

Question 1.1: After purchasing 500gm of sweet laddu, jalebi and barfi each, Ram had ₹150 left with him. How much money does Ram had before the purchase? Show your work.

Question 1.2: Ram wants to purchase one packet of Mix-Namkin and two packets of potato chips with the remaining ₹150. Explain whether he can purchase it or not.

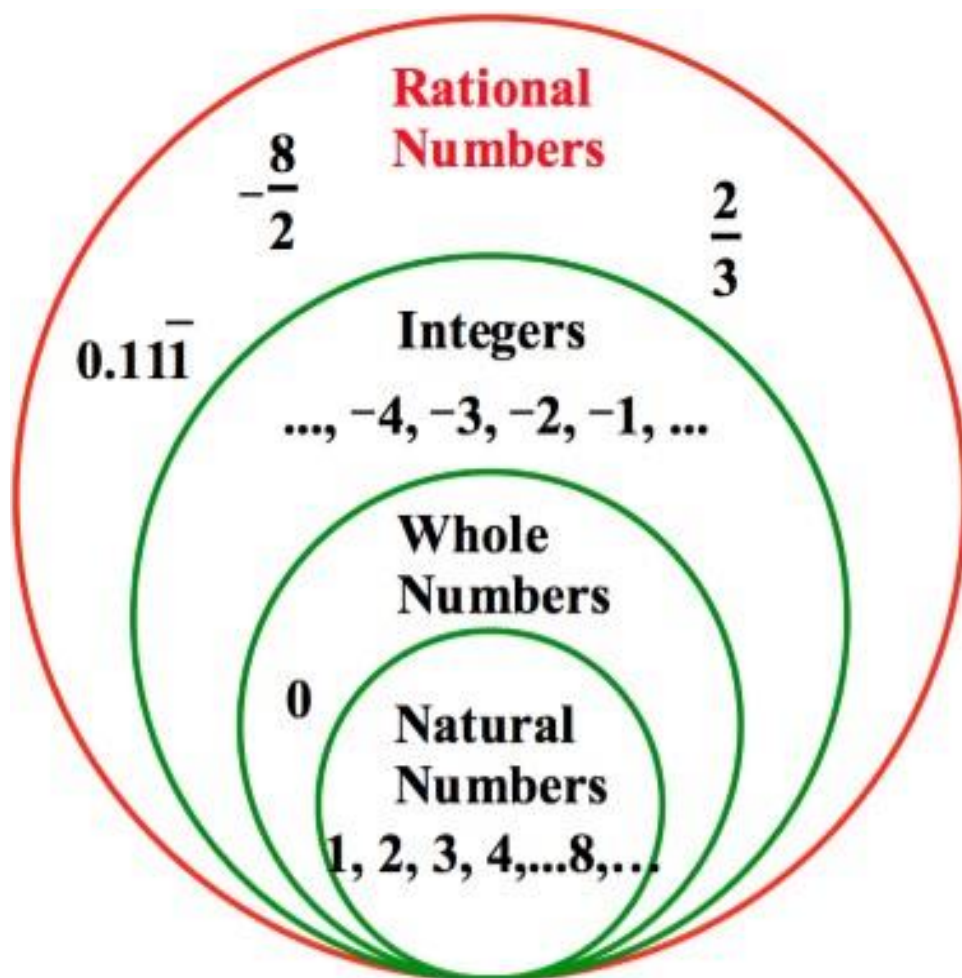
Question 1.3: Rahim had ₹200 and wants to purchase one packet of Mix-Namkin, one packet of potato chips, 250gm Sweet laddu and one bottle of cold drink. But due to insufficient money he had to reduce the quantity of one of the item. Find out the name of that item along with reason.

Question 1.4: David had ₹250 and wants to purchasethose items which were not purchased by his friends. Choose the correct list of items he will purchase.

- (i) Jalebi
- (ii) Roasted Dry fruits
- (iii) Barfi
- (iv) Potato chips

CCT QUESTION

ACTIVITY 1 (MAKE ON A4 SHEET)



SUBJECT - SOCIAL SCIENCE

***Make a Art integrated project file on Natural resources of Manipur. Project should contain following points –

▪ Index, Acknowledgement, Introduction, Recent developments, Conclusion, Sources of information etc.

**** **Complete the following questions in your SST copy.**

1-Interview your grandparents on the education pattern during their times and prepare a comparative analysis of both the education system.

2-Make 5 MCQs on each lesson (history 1&2, Geography 1& civics 1 chapter)Revise all these chapters for p t 1.

3-Learn complete syllabus done in the class for PT-1 Exams in July.

4-Dr Bhimrao Ambedkar is called the father of the Indian constitution. Give a brief description about Dr Bhimrao Ambedkar.

विषय: - संस्कृतम्।

- 1- बालक ,अस्मद् , युष्मद् , राजन्केशब्दोंकेरूपलिखिए।
- 2- पठ्,धाव् ,भूक्,धातुओंकेरूपपांचोंलकारोंमेंलिखिए।
- 3- भारतसरकारकेविभिन्नविभागोंमेंप्रयुक्तसंस्कृतकेध्येयवाक्य(MOTO).
- 3- कोई 10 श्लोकअर्थसहितलिखकरयादभीकरें।
- 4- 10पशुओंकेनामसंस्कृतमेंचित्रसहितलिखिए।
- 5- 10फलोंएवं 10 सब्जियोंकेनामसंस्कृतमेंचित्रसहितलिखिए।
- 6 - संस्कृतछात्रप्रतिज्ञातथाप्रार्थनायादकीजिए।
- 7 - यहसभीकाम C W COPY मेंकरें।

SUBJECT- ARTIFICIAL INTELLIGENCE

All the students do it in your A.I Notebook

1. What is cyber crime?
2. How to recognize and prevent cyber crime?

Make a chart on the following topic.

- Roll No.(1-13)
Task performed by AI (artificial intelligence)
Various practices involve in AI.
Differences between Human Intelligence & AI.
- Roll No.(14-26)
Artificial intelligence examples in daily life.
AI Apps.
- Roll No.(27-40)
Objectives of Smart cities.
Sustainable Development Goals.
- Roll No.(41-53)
Carrier Opportunities in AI.
Advantages & Disadvantages of AI.

CLASS 9th

SUBJECT-- SOCIAL SCIENCE

Qu1-Make a Art integrated project file on social, economic, agricultural, Cultural development of Manipur. Project should contain following points –

▪ Index, Acknowledgement, Introduction, Recent developments, Conclusion, Sources of information etc.

Qu2-Write 5 Multiple choice questions & 5 assertion and reason based questions in your homework copy from first chapter of history, Geography, Economics & Civics.

Qu3-Picture comprehension on History Lesson-1 (The French Revolution) and Civics lesson-1 (What is Democracy, Why Democracy). Qu4. Identify major economic activities around your area. Select one of them and make a list of required fixed capital and working capital for that economic activity.

Qu5 .. Learn complete syllabus done in the class for PT-1 Exams in July.

Qu6- Map Pointing (Subject enrichment Activity)

(i) Important centres(Bordeaux, Nantes, Paris, Marsalles) of French Revolution. (ii) Locate all the States and UTs on the political map of India.(iii) Locate Standard Meridian and Palk Strait on the political map of India.

Complete all pending class work and home work in your sst notebook

SUBJECT- HINDI

G-20 शिखरसम्मेलनकेबारेमेंजानकारीपढ़िएऔरननमनशलखखतप्रश्नोंकेउत्तरशलखखए।

1) जी-20 क्याहै?

2) हालहीमें 2023 मेंहोनेजारहे G20शिखर सम्मेलनकाआयोजनकौनसादेिकररहाहै?

3) G-20 कीअध्यक्षताकीसमयावधिक्याहै? ढढनांकशलखखें?

4) G-20 मेंककतनेदेििशमलहैं?

5)G-20के देिोंकेनामशलखखए।

6) G-20 कीस्थापनाकबहुईथी?

7) 'वसिुैव' काक्याअथथहै

8) 'जीवन' कापर्ू थ रूपक्याहै?

9) G-20 लोगोमेंककसफू ल काउपयोगककयागयाहै?

10) छात्रोंकेशलएसझुईगईगनतववधियाँक्याहैं?

11) अनतधथदेिों G-20 केनामशलखखें?

12) ननम्नशलखखतसांगठनोंकापरू ा नामशलखें?

- आईएमएफ • डब्ल्यूएचओ
- ववश्वव्यापारसांगठन • आईएलओ
- एफएसबी
- ओईसीडी

13) इस G-20 को 'जनताका G20' बनानेकेशलएककसगनतववधिकीयोजनाहै? 14) G20 क्योबनायागयाथा?

15) G20 लोगोक्यासांदिदेताहै?

SUBJECT- SCIENCE

1 Write about 10 examples of chemical reactions which happen naturally

2 Make a working model of any one of the following topic

- (I) Energy conservation
- (II) Eco friendly material
- (III) Health and cleanliness
- (IV) Environment concern
- (V) Innovation in transport

3 Write 20 MCQ from each chapter 1/2/5/7

4 Write down an article on the issue of pollution And environment degradation in about 1000 words

5 Write the scientific name of 20 plants and 20 animals in A4 size sheet

6 Make a chart and write all chemical formula and name of compound using following ions cations

N⁺, K⁺, Cu²⁺, Mg²⁺, Ca²⁺, Zn²⁺, Fe³⁺, Cu²⁺ and Al³⁺,

Anion H⁻, Cl⁻, Br⁻, I⁻, O²⁻, S²⁻, N³⁻, OH⁻ and NO³⁻, HCO³⁻, carbonate, sulphate, sulphide, phosphate.

SUBJECT: MATHEMATICS

1. Write 15 MCQ's of chapter 1 (Number system).

2. Do the following activities:

- a) The number system
- b) The square root spiral

- c) To find \sqrt{x} on the real number line.
3. Do five case study based questions on chapter 1.
 4. Do two assertion and reasoning based questions on chapter 1.
 5. Do one crossword on Number system.
 6. Make one working model of mathematics and make a video of it's working.

SUBJECT – ENGLISH

INSTRUCTIONS:

1. Do holiday homework in separate Rs 10 notebook.
2. Do Project work in Scrap Book.

HOLIDAY HOMEWORK:

1. ARTICLE WRITING:

a) Write an article, in about 100-150 words, for your school magazine on the 'Importance of Music in Life', highlighting the facts that it is soothing, entertaining, and also serves as a therapy.

2. STORY WRITING:

a) Knowledge is power. Based on the following visual, along with your ideas, develop a story based on the theme of helping children from economically weaker sections of society (EWS) and below poverty line (BPL), in about 100-150 words.

3. **DIARY ENTRY:** You went to receive your uncle and aunts from the Bangalore railway station. Write a diary where you share your experience of the journey from home to the railway station.

4. DESCRIPTIVE PARAGRAPH

a) You recently visited the Children's Park, a favourite place for all children, in your city. Write a description of the park in 100-150 words.

b) One of your friends, Raman, is very gentle and polite to you. You regard him as your best friend. Describe him in 100-150 words.

5. PROJECT WORK:

a) **Art Integrated Project (About Manipur and Haryana):** Manipur's and Haryana's introduction, Music (Folk Dance, Musical Instruments), Language & Literature, Crops & Cuisine (mainly about millets), People, Religion, Art and Craft, Tourist Places. # Should include pictures.

b) Read handout on G-20 and answer the related questions on Sheets. G-20 document is shared in your class group along with the questionnaire.

CLASS -10th

SUBJECT – ENGLISH

- 1. Write a letter of complaint, in about 100-150 words, to Cabinet World regarding the faulty cabinet that they have sold to you. You are Damandeep/ Seema of Karol Bagh. Invent the necessary details of your own.**
- 2. You are Anita/ Manak, Sports Secretary of Sunshine High School. You have received the parcel of sports articles ordered by you, but you find some of them to be defective and quite old. Write a letter of complaint, in about 100-150 words, to Messer New Sports, Merrut.**

Art integrated Project for Class 10

Marks- 10 Marks

Topic: Nelson Mandela: A Long Walk to Freedom

Page 1: Cover Page (School, Subject, Year, Name of student and Teacher)

Page 2: Title of your project (Topic)

Page 3: Contents (Index with page numbers)

Page 4 and 5

English: Prepare a biographical sketch of Nelson Mandela mentioning all his details like Date of birth, education, political achievements, family life etc in bullet points. (1 page, points only)

Art: Draw a sketch of Nelson Mandela (Portrait)

Page 6 and 7

English: Write an article on South Africa mentioning its capital, area, GDP, languages spoken, history etc. (2000 words)

Art: Draw a map of South Africa and point out Mandela's Village in it.

Page 8 and 9

English: Write a detailed essay about any one of the following topics. (2000 words)

-The African National Congress

-The costumes of South Africa

Art: Draw/Paste pictures related to the topic you have chosen from the above two.

Page 10 and 11

English: Imagine that you are a famous news anchor and you get a chance to interview Nelson Mandela. Write the interview in the form of question and answer in about 1000 words asking Mandela questions that are important for you in today's generation.

Art: Draw any historical picture of Mandela addressing the people/giving an interview.

Page 12

English and Art: Imagine that you are young Nelson Mandela and you are working hard to free your country from Apartheid. Design a poster to be pasted all over the city calling people

to rise and revolt against the white supremacy and racism. The poster should be colorful and appealing to the public.

Page 13 and 14

English: Write a detailed book review of Nelson Mandela's Biography titled 'A long walk to freedom' in your own words.

Art: Design a book cover for his biography using your own imagination.

Learning Activity :

WORKSHEET-1

Predict the next part of the narration, conversation, description.

Students read the sentences silently and write answer

1. I see doctor visiting my neighbour's house. Somebody must be
2. The clouds are gathering in the sky. It mightin the evening.
3. Road is wet road and slippery. Walk carefully or you maydown.
4. The sun rises in
5. Lockdown in my district is lifted up. When will school
- 6) Vegetables are excellent source vitamins.
- 7) Microscopes make small things appear larger than
- 8) An apple a day keeps away.
- 9) The pineapple, a fruit in tropical climates throughout the world, is native to parts of South America.
- 10) What's wrong with you? You look
(worried / sad.)

Learning Activity:

WORKSHEET-3

Read the following passage carefully and do as directed.

Margie even wrote about it that night in her diary. On the page headed 17 May 2157, she wrote, 'Today Tommy found a real book!'

It was a very old book. Margie's grandfather once said that when he was a little boy his grandfather told him that there was a time when all stories were printed on paper.

They turned the pages, which were yellow and crinkly, and it was awfully funny to read words that stood still instead of moving the way they were turned back to the page before, it had the same words on it that it had when read it the first time.

Do as directed.

1. Underline the main clause.
2. Underline the subordinate clause.
3. Identify the sentences in simple past tense.
4. Underline the infinitives.
5. Identify the exclamatory sentences.
6. Identify the finite verbs.
7. Underline the simple sentences.
8. Identify the complex sentences.
9. Identify the compound sentences.

1. Read the passage and choose the correct answer :

5M

Lockdown phase has led us to think of alternatives to continue our studies. 'Online classes' is one of the options for it. The students could now be in touch with their schools. They would not miss their studies. They receive worksheets, video links, audio files, and images of the books as study material. The teachers and the students can meet on a virtual platform. The students can interact with fellow students, and discuss or share their concerns with the teachers through video or text. The online classes boost the confidence of the students. Those who are not comfortable speaking, share written messages to communicate. The students can work and study at their own pace.

They attend their classes, do the class work, and later finish their homework. Every day they follow a normal school routine at ease sitting at home. So they don't miss the school or the studies. Online classes have proved to be a good option for the education system.

- a) During lockdown phase, alternative to continue school studies is _____.
- i) online classes ii) Physical classes iii) no studies iv) vacation mode
- b) What do the students receive apart from the worksheets to not miss their studies?
- i) video links
ii) audio file
iii) images of the books
iv) all of the above
- c) What do the students share with their teachers?
- i) Masks ii) Books iii) Concerns iv) Data
- d) The students can _____ at their own pace.
- i) Play ii) Study iii) Sleep iv) Talk
- e) Which word is the antonym (opposite) of 'boost'?
- i) Increase ii) Decrease iii) Encourage iv) Support

Read the following passage and answer the following questions.

The Emoji is a small pictogram used to add to the meaning of a message . Born on 1st of November 1997 there were 90 Emojis in total . It is a digital graphic icon used to represent a concept or object , originally used in Japanese text messaging but ever since it was adopted internationally it is being used in other contexts such as social media also . Google is modifying and updating its bank of nearly 1000 emojis to mark the World Emoji Day which was on July 17. The latest changes have been made in the masked face emoji .Changes are made in keeping with the times .The scissors emoji now has the blades looking sharper . Vehicles like taxis and trucks have had their proportions changed . The most significant change has been in the character of the Mask emoji .While the earlier one showed the masked face with its eyes shut - indicating ill health - the new emoji has the eyes open implying that wearing a mask is a regular affair even for healthy people .

- Q.1 An emoji is a small ----- 1x6=6
- a) Picture b) pictel c) pictogram d) pixel
- Q.2 The total number of emojis is -----
- a) 90 b) 1009 c) 1099 d) 1000
- Q.3 What does an emoji add to a message ?
- a) a comic touch b) a colourful touch c) meaning d) nothing at all
- Q4 A graphic emoji represents -----
- a) A concept b) An object c) A concept and an object d) A concept , an object and a context
- Q.5 The scissors emoji has been changed by making
- a) its eyes closed b) its eyes open c) its scissors darker and bigger d) its scissors sharper
- Q.6 A suitable title for this passage could be
- a) Emojis and ME b) I Love Emojis c) The changed Emojis d) The past and present of emojis

SECTION II

7X2=14

- Q.7 What is an emoji ? Name the country of its origin .
- Q.8 What was important about the World emoji day this year ?
- Q.9 Mention the most significant change in the emojis recently ?
- Q.10 Write about the change in the masked emoji .
- Q.9 What important message does this change convey ?
- Q.11 How has the scissor emoji been changed ?
- Q.12 Which is your favourite emoji ,Why?

Darken the circle against the correct option of the following questions with a pencil/pen: (1x 10=10)

I. Read the following passage and answer the questions ① to ⑩ :

When he finished, he went to the window to buy a stamp which he licked and then affixed to the envelope with a blow of his fist. The moment the letter fell into the mailbox the postmaster went to open it , it said :“God;of the money that I asked for, only seventy pesos reached me , send me the rest, since I need it very much. But don’t send it to me through the mail because the post office employees are a bunch of crooks. Lencho.”

- ① Pick the option corresponding to the correct meaning of ‘with a blow of his fist’
- | | | | |
|--------------------------------|-----------------------|---------------------------------|-----------------------|
| (a) giving a thumbs up | <input type="radio"/> | (b) giving a thumbs down | <input type="radio"/> |
| (c) boxing someone in the face | <input type="radio"/> | (d) using the force of his fist | <input type="radio"/> |
- ② What is the tone of the speaker when he says ‘God’ of the money I asked for _____
- | | |
|-----------------|-----------------------|
| (a) friendly | <input type="radio"/> |
| (b) encouraging | <input type="radio"/> |
| (c) formal | <input type="radio"/> |
| (d) worried | <input type="radio"/> |
- ③ Lencho’s letter included
- | | | | |
|------------------------------|-----------------------|-----------------------------|-----------------------|
| (a) details of his problems | <input type="radio"/> | (b) description of his farm | <input type="radio"/> |
| (c) description of the storm | <input type="radio"/> | (d) list of further demands | <input type="radio"/> |
- ④ Lencho needed the money
- | | | | |
|-------------------------------------|-----------------------|------------------------------------|-----------------------|
| (a) to repair the roof of his house | <input type="radio"/> | (b) to buy seeds for the next crop | <input type="radio"/> |
| (c) to survive till the next crop | <input type="radio"/> | (d) both b and c | <input type="radio"/> |
- ⑤ Find a word from the passage which means the same as ‘enough’
- | | | | |
|--------------|-----------------------|--------------|-----------------------|
| (a) job | <input type="radio"/> | (b) feed | <input type="radio"/> |
| (c) adequate | <input type="radio"/> | (d) incubate | <input type="radio"/> |
- ⑥ The story is all about an unconditional _____ .
- | | | | |
|-----------|-----------------------|----------------|-----------------------|
| (a) Love | <input type="radio"/> | (b) Enmity | <input type="radio"/> |
| (c) Faith | <input type="radio"/> | (d) Dependence | <input type="radio"/> |
- ⑦ Lencho was suspicious upon the honesty of the -
- | | | | |
|----------------------------------|-----------------------|----------------|-----------------------|
| (a) employees of the post office | <input type="radio"/> | (b) postmaster | <input type="radio"/> |
| (c) God | <input type="radio"/> | (d) postman | <input type="radio"/> |
- ⑧ According to Lencho, the employees of the post office are -
- | | | | |
|--------------|-----------------------|------------------|-----------------------|
| (a) crooks | <input type="radio"/> | (b) good soul | <input type="radio"/> |
| (c) faithful | <input type="radio"/> | (d) image of God | <input type="radio"/> |
- ⑨ Choose the characteristics displayed by Lencho when he writes the second letter?
- | | | | |
|---------------|-----------------------|----------------|-----------------------|
| (a) Thankless | <input type="radio"/> | (b) Ungrateful | <input type="radio"/> |
| (c) Greedy | <input type="radio"/> | (d) Naive | <input type="radio"/> |
- ⑩ How many pesos did Lencho ask for?
- | | | | |
|---------|-----------------------|----------------------------|-----------------------|
| (a) 70 | <input type="radio"/> | (b) a little less than 70 | <input type="radio"/> |
| (c) 100 | <input type="radio"/> | (d) a little more than 100 | <input type="radio"/> |

SUBJECT- MATHEMATICS

1. WRITE 10-10 MCQ on real numbers and polynomials

2. Do the following activities:

a) The number system

b) The factor tree

c) Geometric meaning of zeroes of a polynomial

3. Do two case study based questions and two assertion reasoning based of chapter 1 and chapter 2.

4. Do crossword of chapter 1 and chapter 2.

5. Make one working model of mathematics and make a video of it's working.

SUBJECT- HINDI

अनुच्छेदलेखन : 1. पेट्रोलकीबढ़तीकीमते

2 जी 20 सम्मलेन

3 इंटरनेट: सूचनाओंकीखानपत्रलेखन : क)

अपनेविद्यालयकेपुस्तकालयमेंप्रसिद्धहिन्दीलेखकोंकीपुस्तकेंमंगवानेकाअनुरोधकरतेहुएप्रधानाचार्यकोल गभग 120 शब्दोंमेंपत्रलिखिए।

ख) आपकाछोटाभाईबहुतअधिकसमयमोबाइलफोनपरबर्बादकररहाहैउसेसमझातेहुएपत्रलिखिए।

(ग)आपपवन/पावनीहैं।आपछुट्टियोंमेंगुजरातघूमनेकाकार्यक्रमबनारहे/रहीहैं।सरदारपटेलकीप्रतिमाभी देखनाचाहते/चाहतीहैं।आपनेजोकार्यक्रमबनायाहैउसमेंक्यासुधारहोसकताहै, अपनेचचेरेभाईकोलगभग 100 शब्दोंमेंपत्रलिखकरपूछिए।

विज्ञापनलेखन

1 अपनापुरानाफ्रिजबेचनेहेतुलगभग 60 शब्दोंमेंविज्ञापनलिखिए।

2

आपकेशहरमेंएकहास्यकविसम्मेलनकाआयोजनहोरहाहैइसमेंदेशकेप्रसिद्धहास्यकविआमंत्रितहैंइसके प्रचारकेलिएलगभगसाठशब्दोंमेंविज्ञापनतैयारकीजिए।

सन्देशलेखन

1 मातृदिवसकेअवसरपरअपनीमांकेलिएभावपूर्णसंदेशलगभग 60 शब्दोंमेंलिखिए।

2 अपनेचचेरेभाईकोउसकेजन्मदिवसकेअवसरपरशुभकामनासंदेशलिखिए।

SUBJECT- SCIENCE

Question number 1-3 will be done in separate register and for question number 4 make creative file.

1. Make Pictionary of 50 words from biology
2. Write 50 chemical equations and balance it write the type of reaction of those equations
3. Write a notes on our environment.
4. Make an art integrated project on Manipur vs Haryana
 - a) Effect of scientific development on the social and cultural life of these two States
 - b) Flora and fauna present in these two states and their characteristics
 - c) Climatic conditions of these two States
 - d) Write a biography of a scientist who is from these two States

SUBJECT-SOCIAL SCIENCE

1-CBSE PROJECT--

(Anyone from the following in A-4 Size Paper) ConsumerAwarenes**OR** Sustainable Development **OR** Social issues

Project work should be at least 15 to 20 pages.

2-SUBJECT ENRICHMENT (MAP WORK COPY)

* On an outline map of India and show the different types of soil in India.

*On an outline political map of world so the following-

Germany, France, Italy , Japan, Britain, America, Austria hungry and Turkey.

3--Complete the following questions in your SST copy.

¶--Picture comprehension on History Lesson-1 (The Rise of Nationalism in Europe) and Civics lesson-1 (Power sharing).

¶-Write 5 Multiple choice questions & 5 assertion and reason based questions in your homework copy from first chapter of history, Geography, Economics & Civics.

¶-Revision of history, geography, civics and economics for 1st periodic test.

¶ Complete all pending class work and home work in your sst notebook.